














Wednesday

- Write the number that comes between 3 and 5.
- Draw two spots on the fish. 
- Colour the 5c coin red. 
- Colour the two sets that have the same amount.
 (a)  (b)  (c) 
- Count. Add. Write.
 
 + =
- Write the missing number.

- Draw 5 spots on the butterfly. 
- Ring the odd one out.
 (a)  (b)  (c)  (d) 















Count. Add. Write.

9. $\begin{array}{c} \bullet \bullet \bullet \\ \square + \square = \square \end{array}$

10. $\begin{array}{c} \bullet \bullet \bullet \bullet \\ \square + \square = \square \end{array}$

/10

Thursday

- Draw 1 more banana to make 5. 
- Write the number that comes before 3.
- Match.
 day • 
 night • 
- Colour 4 rabbits grey. 
- How many? 
- Finish the pattern.

- Count. Add. Write.
 
 + =
- Ring the largest triangle.
 (a)  (b)  (c) 
- Colour the jar that is full green.
 (a)  (b)  (c) 
- Colour the jar that is empty red.

/10