


Monday


1. Count and write the correct number.




3 4 5

2. Write the numeral three.

3. How much? c 

4. Draw 4 windows on the house. 

5. Ring the odd one out.

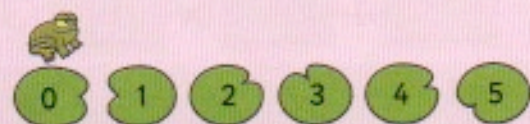


6. Which set has less?



7. Write the number that comes after 4.

8. How many?



9. Start on 2. Go on 2 more. What number do you land on?

10. Start on 4. Go on 1 more. What number do you land on?

Tuesday

1. Ring the odd one out.



2. Write. Colour the correct number of frogs.



3. Colour the set that has less.



4. Colour 4 circles yellow.



5. Colour the longest chain.



6. Write the number that comes before 6.


7. Finish the pattern.




8. Count. Add. Write.



Write two ways you can put 5 spots on the butterfly.

9.  + = 5

10.  + = 5