

Week 6 Test

1. Write the number that comes between 2 and 4.

2. Draw 1 more to make 5.



3. Colour three spots on the ladybird.



4. Colour the first car red.



5. How many?



6. Count. Add. Write.

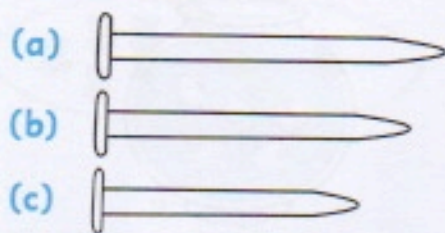


$$\square + \square = \square$$

7. Fill in the missing numbers on the caterpillar.






8. Colour the long nail red. Colour the longer nail yellow. Colour the longest nail blue.



Problems

9. Match the shapes.

Colour each pair the same colour.



10. How much? c

