





Week 5 Test

1. Write the number that comes before 2.

2. Colour the shortest chain.



3. Count. Add. Write.



+ =


4. How many?




5. Colour the odd one out.



6. Colour the shapes that are not triangles.



7. Count. Add. Write.



+ =

8. Fill in the missing numbers.

1, , 3, , 5

Problems

9. Count and write the correct number.



10. Start on 3. Go on 2 more.

What number do you land on?

1	2	3	4	5
---	---	---	---	---

